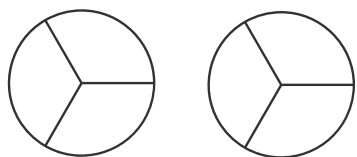
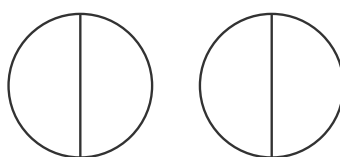


分数の計算3

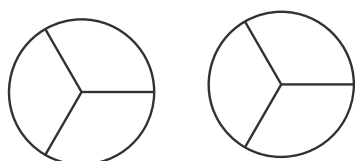
自分で問題をつくりましょう。そのあと、
分数のあらわす分だけ 色をぬって、計算しましょう。



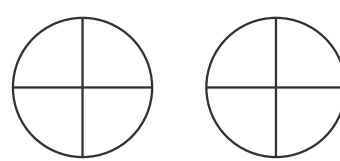
$$\frac{\quad}{3} + \frac{\quad}{3} = \frac{\quad}{3}$$



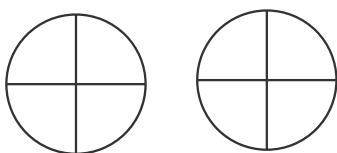
$$\frac{\quad}{2} + \frac{\quad}{2} = \frac{\quad}{2}$$



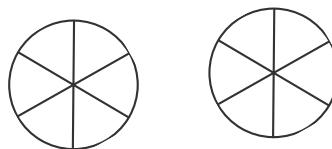
$$\frac{\quad}{3} + \frac{\quad}{3} = \frac{\quad}{3}$$



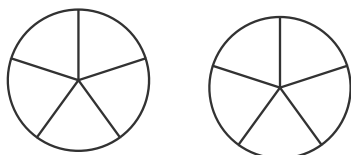
$$\frac{\quad}{4} + \frac{\quad}{4} = \frac{\quad}{4}$$



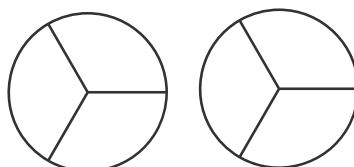
$$\frac{\quad}{4} + \frac{\quad}{4} = \frac{\quad}{4}$$



$$\frac{\quad}{6} + \frac{\quad}{6} = \frac{\quad}{6}$$



$$\frac{\quad}{5} + \frac{\quad}{5} = \frac{\quad}{5}$$



$$\frac{\quad}{3} + \frac{\quad}{3} = \frac{\quad}{3}$$

