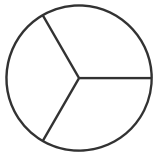
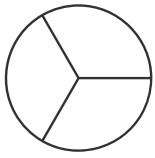
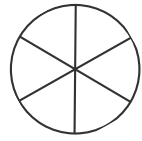
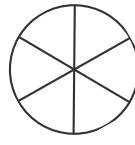


# 分数の計算5

分数のあらわす分だけ 色をぬって、計算しましょう。



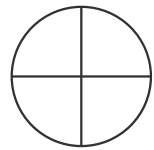
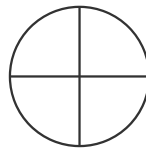
$$\frac{3}{3} - \frac{1}{3} = -$$



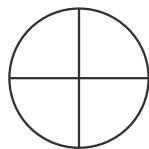
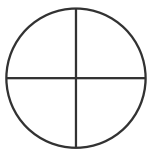
$$\frac{5}{6} - \frac{2}{6} = -$$



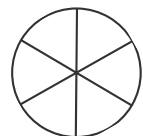
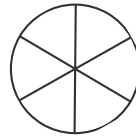
$$\frac{3}{5} - \frac{1}{5} = -$$



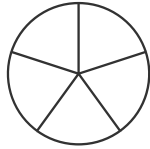
$$\frac{3}{4} - \frac{2}{4} = -$$



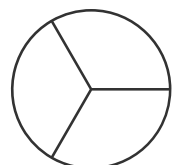
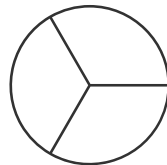
$$\frac{3}{4} - \frac{2}{4} = -$$



$$\frac{5}{6} - \frac{2}{6} = -$$



$$\frac{5}{5} - \frac{2}{5} = -$$

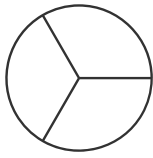
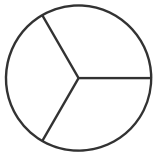


$$\frac{3}{3} - \frac{2}{3} = -$$

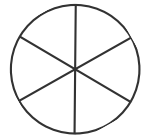
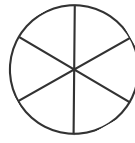


# 分数の計算5

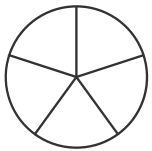
分数のあらわす分だけ 色をぬって、計算しましょう。



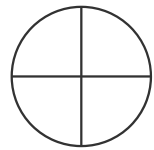
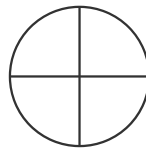
$$\frac{3}{3} - \frac{2}{3} = \underline{\hspace{1cm}}$$



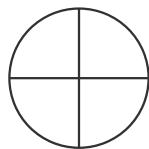
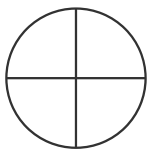
$$\frac{5}{6} - \frac{3}{6} = \underline{\hspace{1cm}}$$



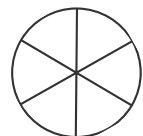
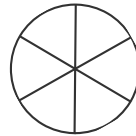
$$\frac{3}{5} - \frac{2}{5} = \underline{\hspace{1cm}}$$



$$\frac{3}{4} - \frac{1}{4} = \underline{\hspace{1cm}}$$



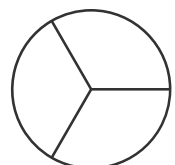
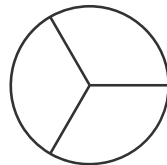
$$\frac{3}{4} - \frac{3}{4} = \underline{\hspace{1cm}}$$



$$\frac{5}{6} - \frac{4}{6} = \underline{\hspace{1cm}}$$



$$\frac{5}{5} - \frac{3}{5} = \underline{\hspace{1cm}}$$



$$\frac{3}{3} - \frac{1}{3} = \underline{\hspace{1cm}}$$

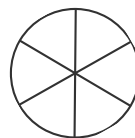


# 分数の計算6

自分で問題をつくりましょう。そのあと、  
分数のあらわす分だけ 色をぬって、計算しましょう。



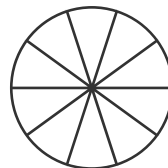

— — — = —



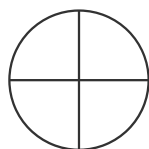
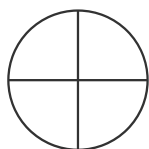
— — — = —



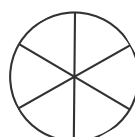
— — — = —



— — — = —




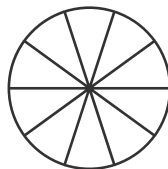
— — — = —



— — — = —



— — — = —

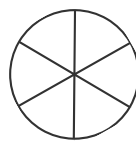
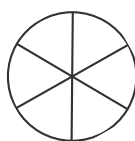
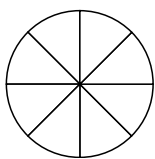
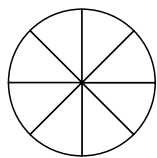


— — — = —



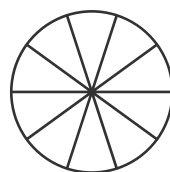

# 分数の計算7

自分で問題をつくりましょう。そのあと、  
分数のあらわす分だけ 色をぬって、計算しましょう。



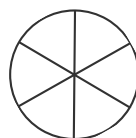
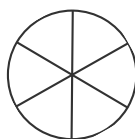
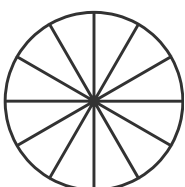
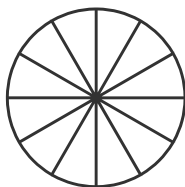
— — — = —

— — — = —



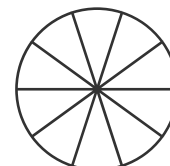
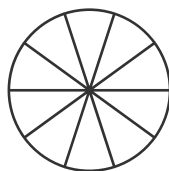
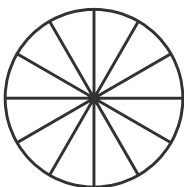
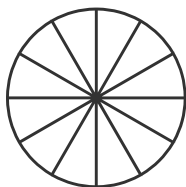
— — — = —

— — — = —



— — — = —

— — — = —



— — — = —

— — — = —

