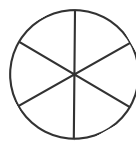
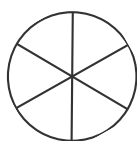
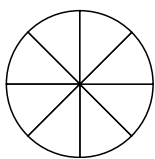
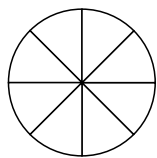


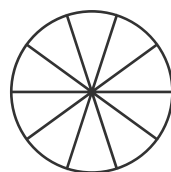

# 分数の計算7

自分で問題をつくりましょう。そのあと、  
分数のあらわす分だけ 色をぬって、計算しましょう。



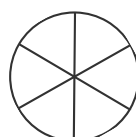
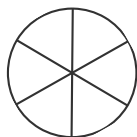
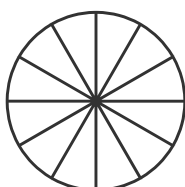
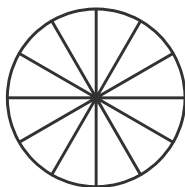
— — — = —

— — — = —



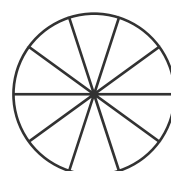
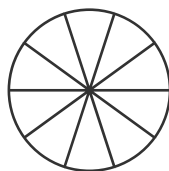
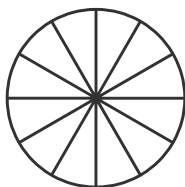
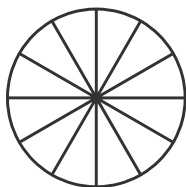
— — — = —

— — — = —



— — — = —

— — — = —



— — — = —

— — — = —

