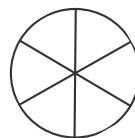
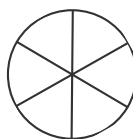


# 分数の計算6

自分で問題をつくりましょう。そのあと、  
分数のあらわす分だけ 色をぬって、計算しましょう。



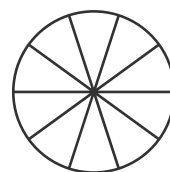

— — — = —



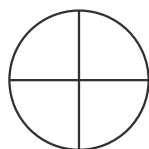
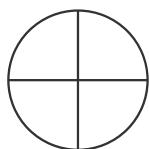
— — — = —



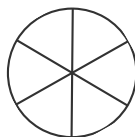
— — — = —



— — — = —



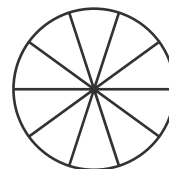
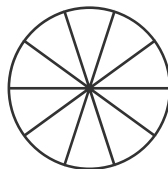
— — — = —



— — — = —



— — — = —



— — — = —

